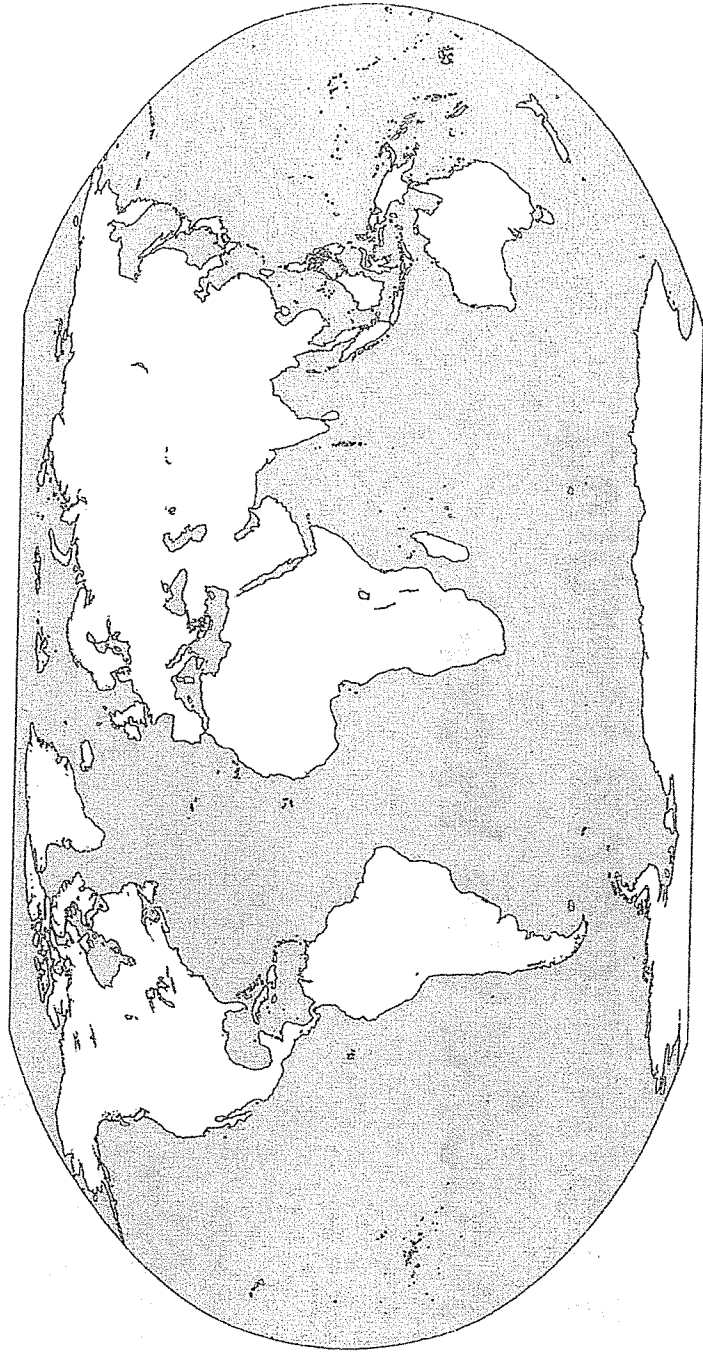


Investigating the Global, Inter-Regional & Regional Patterns of Early Farming and Herding Around the World

1. Use the geographic information provided in the readings along with resources such as a classroom map or maps in the back of your textbook to locate and clearly label each of these four sites: Catal Hoyuk (this was in the previous lesson), Banpo, Chilca, and Jericho.
2. In which regions of the world were these settlements?
3. Using your chart, compare the information gathered about the settlements and what you know about Catal Hoyuk. List what they have in common in the box below on the left.
4. Now, use your list of commonalities to sum up what you think was the GLOBAL PATTERN. Write your hypothesis in the box below.
5. Stop & Jot on the back of this sheet and then Turn & Talk with your group about the following question: These settlements would have traded and communicated with other settlements nearby, but NOT with each other. Why not?

What these settlements have in common:

Between 9000 BCE and 4000 BCE, the Global Pattern seems to be:

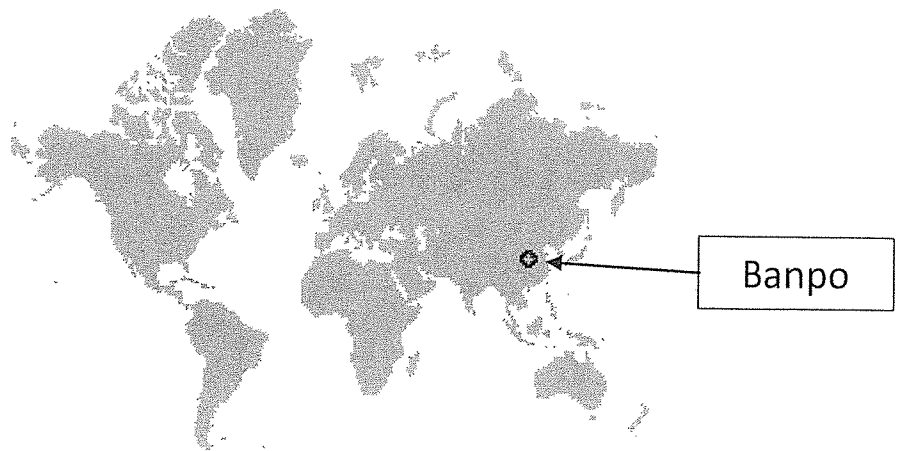
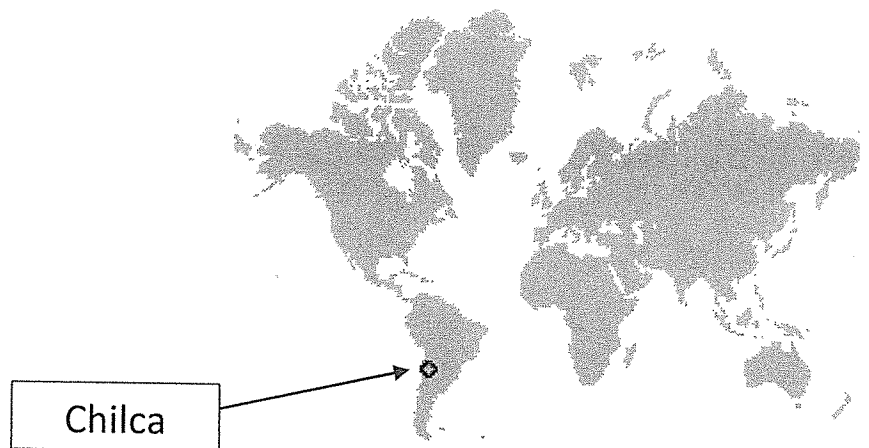


Name: _____

Date: _____

Hour: _____

Early Farming and Herding Around the World



Use the *Atlas of World History* to locate Catal Huyuk and Jericho. Turn to the *Agriculture and Early Settlements* map found on pages 8-9.